

**INTERNATIONAL INDIAN SCHOOL BURAIDAH**

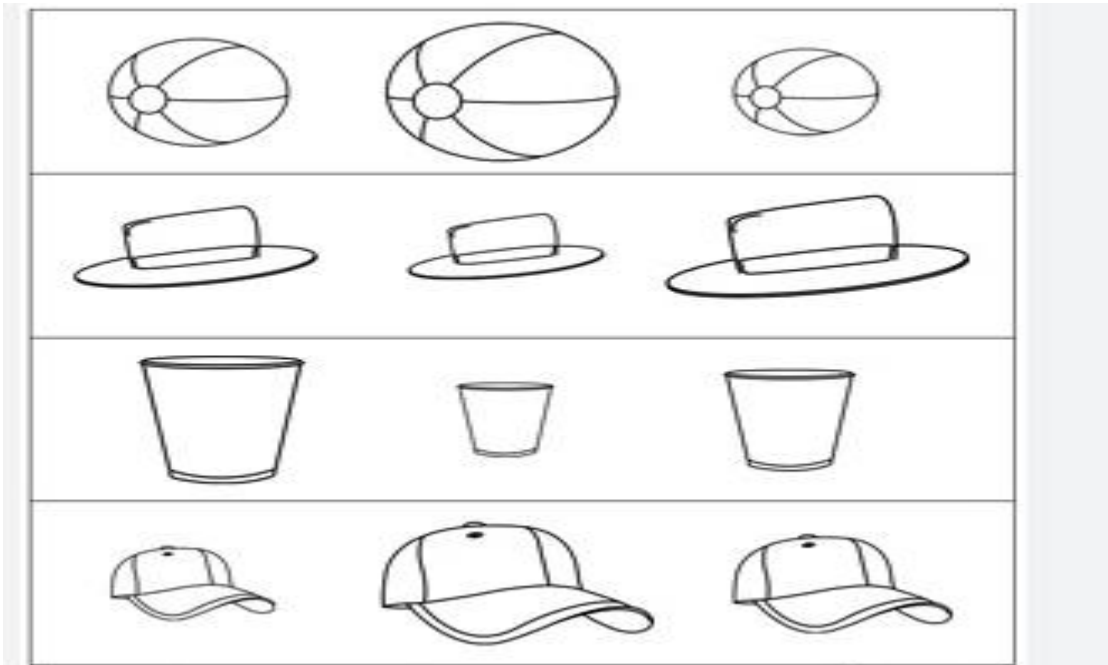
**Worksheet for the Academic Year 2023-24**

**Mathematics Worksheet-01**


**Chapter: Foundational Numeracy**

NAME: \_\_\_\_\_ CLASS1 ( ) DATE: \_\_\_ / 05/2023

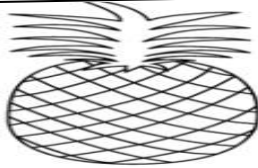
A. Tick ( ✓ ) the **biggest** and cross( x ) the **smallest** objects.



B. Tick ( ✓ ) the **shortest** and cross( x ) the **longest** things.



C. Circle the thickest one.

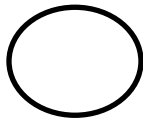


D. Ring the animal that is far from the tree.




E. Write the topmost number given the following.


5
1
7
3



4
2
9
5




3
7
8
6




F. Write the bottommost number given the following.

1
8
6
4



8
5
9
3



5
8
4
1

