

**INTERNATIONAL INDIAN SCHOOL BURAIDAH**

**Worksheet for the Academic Year 2023-24**

**Mathematics Worksheet-09**

**Ch# 10 Time and Money**

Name: \_\_\_\_\_

Class 1 ( )

Date: \_\_\_\_\_

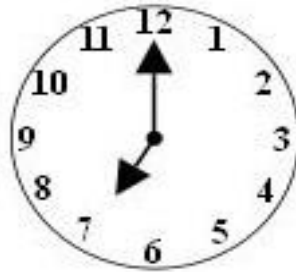
**A. WRITE THE TIME SHOWN IN THE FOLLOWING CLOCK FACES.**



\_\_\_\_\_



\_\_\_\_\_



\_\_\_\_\_



\_\_\_\_\_



\_\_\_\_\_



\_\_\_\_\_

**B. FILL IN THE BLANKS.**


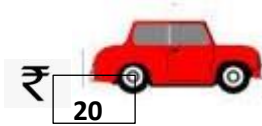
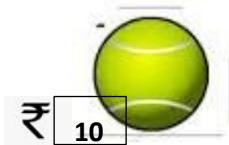
1. There are \_\_\_\_\_ days in a week.
2. \_\_\_\_\_ is the first month of a year.
3. The day that comes after Tuesday is \_\_\_\_\_.
4. The day that comes before Sunday is \_\_\_\_\_.

5. \_\_\_\_\_ is the last month of a year.

6. The symbol used for rupees is \_\_\_\_\_.

7. The long hand of a clock is \_\_\_\_\_ hand.

**C. CIRCLE THE CORRECT AMOUNT TO BUY THE ITEM.**



**D. How many days are there in a week? What are they?**

**Ans:** There are \_\_\_\_\_ days in a week.

1. Sunday

2. \_\_\_\_\_

3. \_\_\_\_\_

4. \_\_\_\_\_

5. \_\_\_\_\_

6. \_\_\_\_\_

7. \_\_\_\_\_