

INTERNATIONAL INDIAN SCHOOL BURAIDAH

SAMPLE PAPER- TERM 2 (2023-24)

CLASS1-MATHEMATICS

DATE:

DURATION: 2Hrs

MAX.M: 40

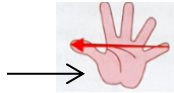
NAME: _____

CLASS1/SEC ____

Adm.# _____

A. CHOOSE THE CORRECT ANSWER. (5M)

1. Identify this



a) finger

b) handspan

c) footspan

2. Number name of 31 is

a) thirty one

b) thirteen

c) thirty

3. 7 tens and 0 one makes

a) 70

b) 7

c) 17

4. Short hand of a clock is called

a) minute hand

b) second hand

c) hour hand

5. $59 + \underline{\quad} = 59$

a) 2

b) 0

c) 1

B. FILL IN THE BLANKS. (5M)

1. The number name of 55 is _____.

2. _____ is the last month of a year.

3. The day that comes after Wednesday is _____.

4. $70 - 1 = \underline{\quad}$

5. The long hand of a clock is _____.

C. WRITE "T" FOR TRUE AND "F" FOR FALSE. (5M)

1. June is the first month of a year. _____

2. There are 7 days in a week. _____

3. $47 = 7$ tens and 4 ones. _____

4. We can use body parts to measure the length of an object. _____
5. The day that comes before Sunday is Saturday. _____

D. SOLVE THE FOLLOWING QUESTIONS. (16M)

1. Write the number names.


- a) 89 - _____
- b) 47 - _____
- c) 100 - _____

2. Fill in the blanks with $<$, $>$ or $=$


- a) 44 _____ 54
- b) 90 _____ 19
- c) 23 _____ 32
- d) 62 _____ 62

3. Write "H" for the heavier thing and "L" for the lighter thing in each option.

a.



b.



4. Rewrite the numbers in decreasing order.

20	35	9	76

5. Circle the container that has more capacity.

a.



b.



6. Add the following.

a.

T	O
6	0
+	2 4

b.

T	O
7	4
+	1 9

7. Write the time shown in the following clock faces.



a) _____

b) _____

8. Subtract the following.

a.

T	O
4	5
-	2 2

b.

T	O
8	6
-	9



E. ANSWER THE FOLLOWING. (9M)

- 45 birds were sitting on a tree. If 16 of them flew away. How many birds were left on the tree now?

Ans: _____ birds.

<input type="text"/>	T	O

2. Fill in the blanks.



_____ + _____ = _____ flowers

_____ x _____ = _____ flowers

3. Circle the correct amount to buy the item.



₹ 12



₹ 15



₹ 7

