

INTERNATIONAL INDIAN SCHOOL BURAIDAH

Worksheet for the Academic Year 2023-24

Mathematics Worksheet-04

Ch#3 Subtraction up to 10 & Ch#4 Shapes

Name: _____ class 1() Date: 22/06/23

- ❖ Subtraction is when something is taken away.
- ❖ The symbol of subtraction is '-' (Minus).
- ❖ When we subtract 1 from a number, the answer is the number just before.

$$4 - 1 = \underline{3} \qquad 7 - 1 = \underline{6} \qquad 1 - 1 = \underline{0}$$

- ❖ When we subtract zero from a number, the answer is the same number.

$$7 - 0 = \underline{7} \qquad 3 - 0 = \underline{3} \qquad 9 - 0 = \underline{9}$$

- ❖ When we subtract a number from itself, the answer is zero.

$$5 - 5 = \underline{0} \qquad 8 - 8 = \underline{0} \qquad 10 - 10 = \underline{0}$$

- I. Subtract by drawing sticks and crossing out.

6	8	4
- 5	- 3	- 4
<div style="border: 1px solid black; width: 40px; height: 30px; margin: 0 auto;"></div>	<div style="border: 1px solid black; width: 40px; height: 30px; margin: 0 auto;"></div>	<div style="border: 1px solid black; width: 40px; height: 30px; margin: 0 auto;"></div>

- II. Subtract the following numbers using number strip.

0	1	2	3	4	5	6	7	8	9	10
---	---	---	---	---	---	---	---	---	---	----

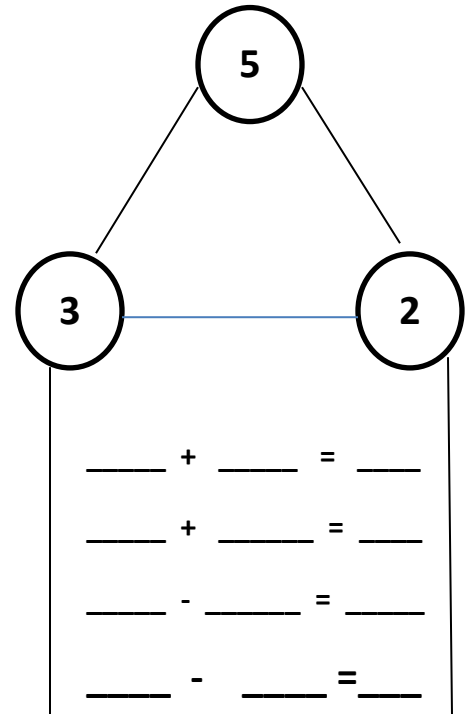
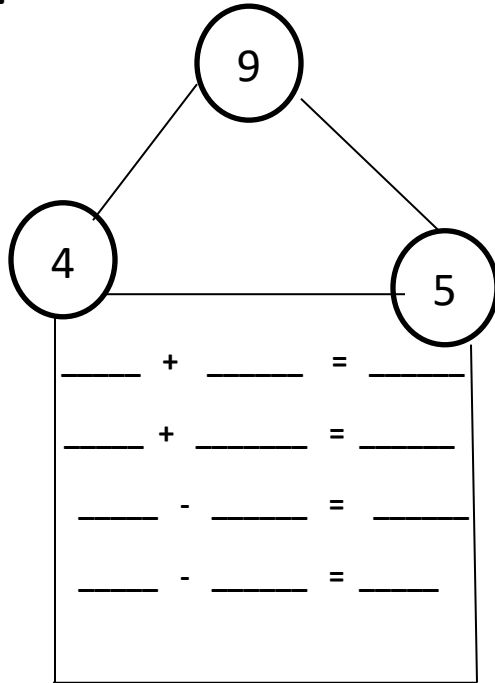
a) $5 - 4 =$ _____

b) $10 - 2 =$ _____

c) $8 - 4 =$ _____

d) $3 - 3 = \underline{\hspace{2cm}}$

III. Write addition facts and subtraction facts for each number family.



IV. Fill in the blanks.

a) $3 - 3 = \underline{\hspace{2cm}}$

b) $8 - 1 = \underline{\hspace{2cm}}$

c) $6 - 0 = \underline{\hspace{2cm}}$

d) $5 - 2 = \underline{\hspace{2cm}}$

e) Take away 3 from 6, we get $\underline{\hspace{2cm}}$.

f) Take away 2 from 3, we get $\underline{\hspace{2cm}}$.



V. Story sum:

There are 9 balloons.

3 balloons burst.

Now $\underline{\hspace{2cm}}$ balloons left.

$9 - 3 = \underline{\hspace{2cm}}$


Ch# 4 SHAPES

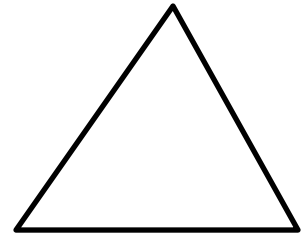
FILL IN THE BLANKS.


1. A triangle has _____ sides and _____ corners.
2. A circle has _____ corner.
3. A rectangle has _____ long sides and _____ short sides.
4. A circle is made of _____ curved line.
5. _____ has four equal straight lines.


NAME THE SHAPES GIVEN BELOW.











MATCH THE SHAPES WITH OBJECTS.

