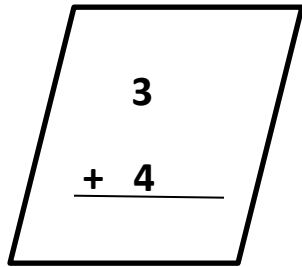


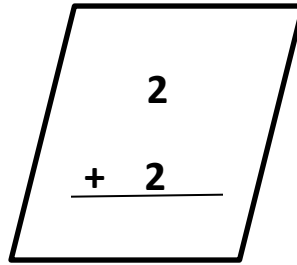
D. SOLVE THE FOLLOWING QUESTIONS.

1. Add vertically by drawing sticks.

a)



b)



2. Write number names.

a) 17 _____

b) 12 _____

c) 20 _____

3. Fill in the boxes.

before	between	after
	8	
	18	
	13	

4. Add or subtract the following numbers by using number strips.

8	9	10	11	12	13	14	15	16	17	18	19	20
---	---	----	----	----	----	----	----	----	----	----	----	----

a) $13 + 4 =$ _____

b) $20 - 3 =$ _____

c) $8 + 6 =$ _____

5. Name the given shapes.

a)











b)



6. Rewrite the numbers in increasing order.

a) 2	15	8	19	
b) 4	10	17	7	

7. Match the shapes with objects.

1.		a)	
2.		b)	
3.		c)	
4.		d)	

8. Write the missing numbers.

15			18		
----	--	--	----	--	--

9. Jeena has 6 dolls. Then she got 4 more.
How many dolls does Jeena have now?

	T	O


ANS: Jeena has _____ dolls.

10. Cross out 2 from the picture and answer how many left.



$$8 - 2 = \underline{\hspace{2cm}}$$

11. Make a group of 10, then write its addition fact.



$$\underline{\hspace{2cm}} \text{ ten} + \underline{\hspace{2cm}} \text{ ones} = \underline{\hspace{2cm}}$$