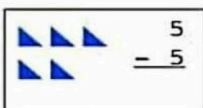
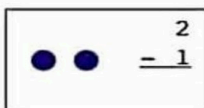
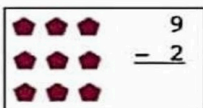
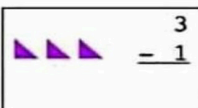
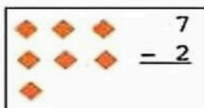
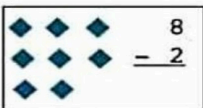
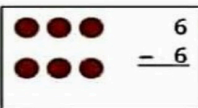
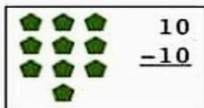
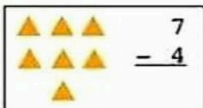
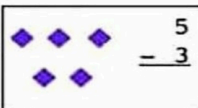
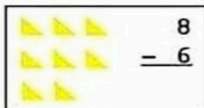
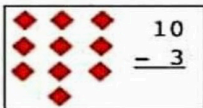
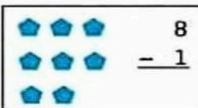
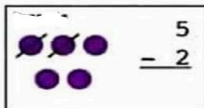


INTERNATIONAL INDIAN SCHOOL BURAI DAH  
WORKSHEET FOR THE ACADEMIC YEAR 2024-2025


UKG / TERM- 2 / MATHS


NAME \_\_\_\_\_ UKG: A / B DATE : \_\_\_\_\_


1. COUNT, SUBTRACT AND WRITE THE NUMBERS.





## 2. HORIZONTAL SUBTRACTION.


	$\underline{5} - \underline{2} = \underline{3}$
-----------------------------------------------------------------------------------	-------------------------------------------------

	$\underline{\quad} - \underline{\quad} = \underline{\quad}$
-----------------------------------------------------------------------------------	-------------------------------------------------------------

	$\underline{\quad} - \underline{\quad} = \underline{\quad}$
-----------------------------------------------------------------------------------	-------------------------------------------------------------

	$\underline{\quad} - \underline{\quad} = \underline{\quad}$
-----------------------------------------------------------------------------------	-------------------------------------------------------------

	$\underline{\quad} - \underline{\quad} = \underline{\quad}$
------------------------------------------------------------------------------------	-------------------------------------------------------------

	$\underline{\quad} - \underline{\quad} = \underline{\quad}$
-------------------------------------------------------------------------------------	-------------------------------------------------------------