

**INTERNATIONAL INDIAN SCHOOL BURAI DAH**

**Worksheet for the academic year 2024-25**

**Chapter#4 Shapes and Patterns**


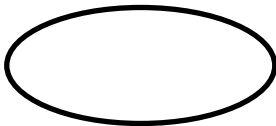


Name: \_\_\_\_\_ Class 1 ( ) Date: \_\_\_\_\_

---

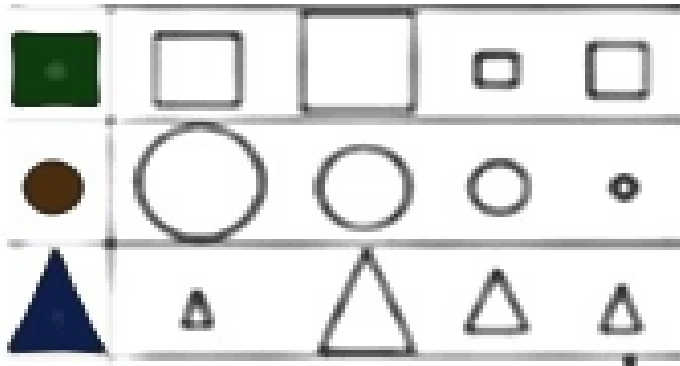
**A. FILL IN THE BLANKS.**

1. A triangle has \_\_\_\_\_ sides.
2. A rectangle has \_\_\_\_\_ long sides and \_\_\_\_\_ short sides.
3. A circle is made of \_\_\_\_\_ curved line.
4. A square has \_\_\_\_\_ equal sides.

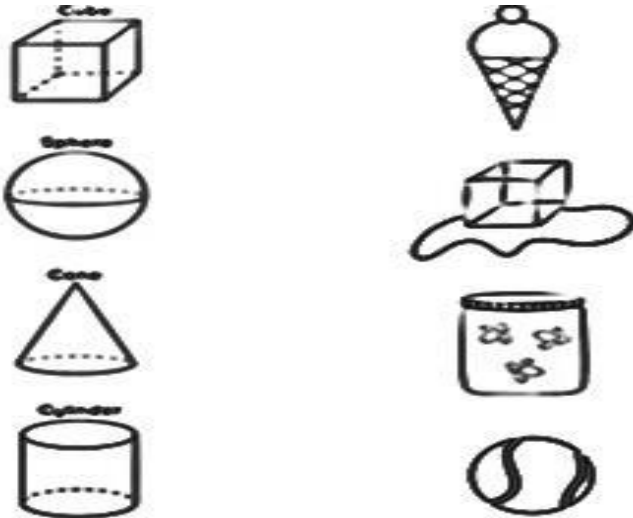
**B. NAME THE SHAPES GIVEN BELOW.**



**C. RING THE ONE THAT IS THE SAME SHAPE AND SIZE.**



**D. MATCH THE SHAPES WITH OBJECTS.**



**E. WHAT COMES NEXT?**

