

INTERNATIONAL INDIAN SCHOOL BURAI DAH

WORKSHEET FOR THE ACADEMIC YEAR 2024-25

MATHEMATICS WORKSHEET-07

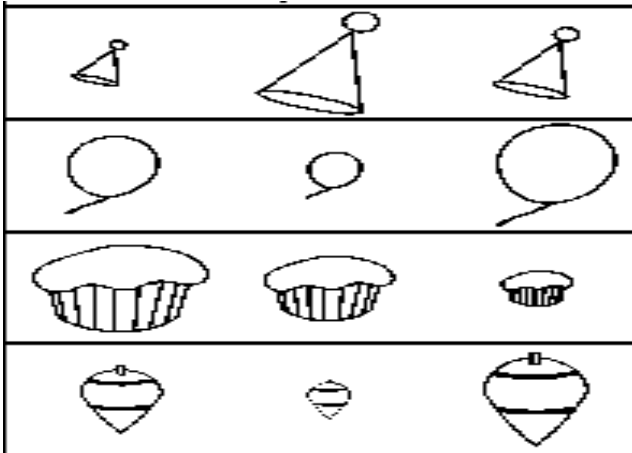
Ch#8 Measurement & Ch#11 Data

Name: _____

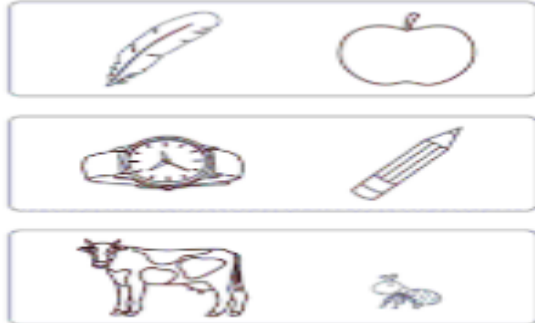
Class 1 ()

Date: _____

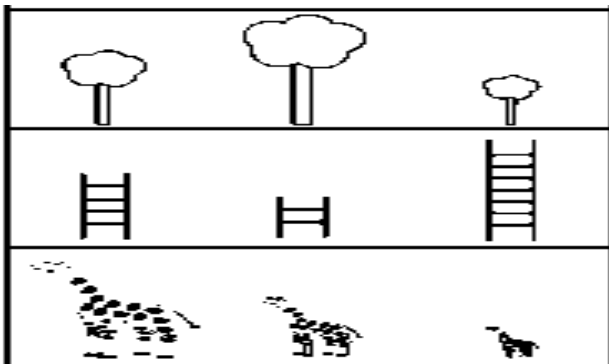
A. Circle the biggest object and tick (✓) the smallest one.



B. Circle the heavier one and tick (✓) the lighter one.



C. Circle the longest one and tick (✓) the shortest one.



D. How long is each object?



About _____ paperclips long




About _____ paperclips long




About _____ paperclips long

E. How heavy is each object?



a) My book weighs about _____ apples.



b) 8 pencils weigh as much as _____ sandwich.

F. If each jug holds 2 glasses of water, colour how many glasses will fill these jugs?




=







G. Circle the one that holds more.







H. Find out how many of each kind?



- a) 
- b) 
- c) 
- d) 

I. Count and write how many of each?

- Apple → 
- Banana → 
- Watermelon → 
- mango → 



- a) Which fruits are the most in number? _____
- b) Which fruits are the least in number? _____
- c) Which two fruits are the same in number? _____ and _____.