

INTERNATIONAL INDIAN SCHOOL BURAIDAH

Worksheet for the Academic Year 2024- 25

Name: _____ CLASS:2 () SUBJECT : MATHS DATE: _____

Ch# 3 Subtraction

A.Fill in the blanks

- 1) _____ is the opposite of addition.
- 2) If a number is subtracted from itself, the difference is always _____.
- 3) The answer in subtraction is called _____.
- 4) The symbol of subtraction is _____
- 5) If we subtract _____ from a number , the difference is the number itself.

B.Subtract the following:

a)

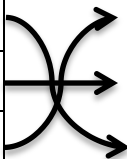
\square -	4	4
	1	3

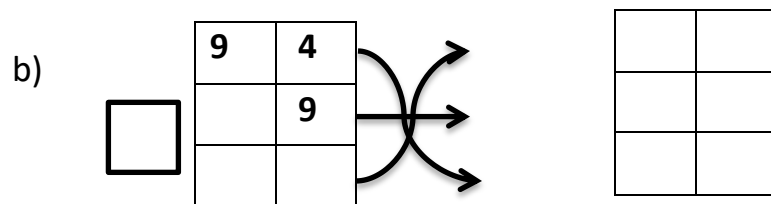
b)

\square -	3	7
	1	6

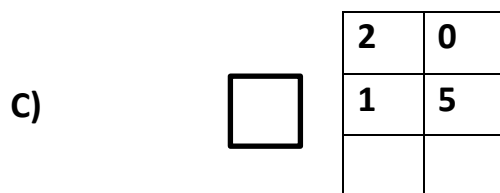
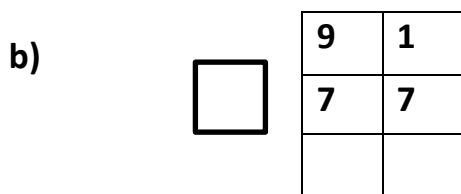
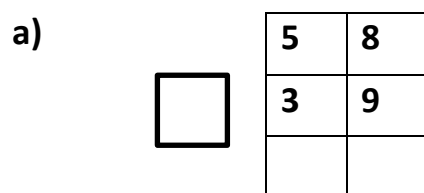
C .Find the difference and check your answer using addition:

a)

\square -	6	5		\square		
	3	7				



D) Regroup and subtract.



E) Break apart the ones to subtract .

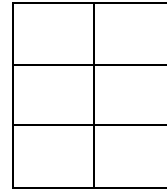
1) 59 - 6

2) 68 - 7

F) Word Problem .

1)Anandita has 74 shells in her collection. Dania has 39 less than her. How many shells does Dania have?

Ans: _____



2)The library has 63 maths books and 44 science books . How many less science books than maths books are there?

Ans: _____

