

INTERNATIONAL INDIAN SCHOOL BURAIDAH

Mid Term Sample Paper (2024 - 2025)

Class : 3 / Subject: MATHEMATICS

Date : 26/09/2024

Duration: 2.5 Hours

Max.Marks : 60

A.Choose the correct answer.

(10 x1 =10)

1. The result obtained on addition is called the _____
a) product b)sum c)difference d)data
2. The smallest 4- digit number is _____
a) 1000 b)2222 c)1111 d)5332
3. Picture charts are also called _____.
a)Key b) Title c) Pictograph d)bar graph
4. $654 - 0 =$ _____
a) 654 b) 650 c) 954 d)754
5. $7 \times 8 =$ _____
a) 64 b) 56 c) 40 d) 44
6. For rounding off a number to the nearest ten, check the digit at the _____ place.
a)thousands b) hundreds c) tens d) ones
7. $8 \times 2 \times 0 =$ _____
a) 16 b) 0 c) 8 d)20
8. We use _____ when we need to find out how many are left.
a)Subtraction b)Addition c)Multiplication d)division
9. $6 \times 50 =$ _____
a) 200 b) 4 c)600 d) 300
10. 8 tens = _____
a) 70 b)90 c)10 d)80

B.Fill in the blanks.

(10 x 1=10)

11. In multiplication, the numbers that are multiplied are called _____.
12. _____ of a digit in a number is determined by the position of that digit in the number.
13. In Roman numerals, I after a V or an X meant that it had to be _____.
14. The _____ tells what information the pictograph gives
15. _____ is a faster way to do repeated addition.
16. 1 thousand = _____ hundreds.
17. To build the greatest number, write the digits in _____ order.

18. When a number is multiplied by _____, the product is always the number itself.

19. $411 - 411 =$ _____.

20. _____ $\times 35 = 350$

C. Write 'True' or 'False'.

(10 x 1 =10)

21. The result obtained on subtraction is called the product.

22. Multiplication is also repeated addition.

23. $136 - 0 = 0$

24. The expanded form of 1342 is $1000 + 300 + 40 + 2$.

25. When zero is subtracted from any number, the difference is the number itself.

26. $45 \times 100 = 4500$

27. $21 + 1 = 24$

28. $4 \times 3 = 12$

29. Bar graphs use bars to represent data.

30. In Roman numerals the value of V is 5.

D. Answer the following questions.

(5 x 2=10)

31. Find the product of 624×3

32. Subtract $807 - 235$

33. Add $348 + 274$

34. Rearrange the numbers in ascending order 7,321 2,182 9,231

35. Build the greatest and smallest numbers using the digits 0, 7, 3, 5.

E. Answer any 4 questions.

(4 x 3=12)

36. Subtract $5253 - 3260$

37. Multiply 53×25

38. Check your subtraction using addition. $842 - 654$

39. Add $345 + 131 + 254$

40. Round the following numbers to the nearest 10.

a) 43 _____ b) 39 _____ c) 65 _____

41. Write the expanded form and word form 2714

F. Answer any 2 questions.




(2 x 4=8)

42) If one egg carton can hold 65 eggs, how many eggs can you put in 25 such cartons ?

43) 576 people were in the auditorium , after sometime 140 people left the auditorium. After an hour

180 people came to the auditorium. How many people are in the auditorium now?

44) Use the given pictograph to answer the questions.

Favourite TV channels	
Sports	
Cartoon	
Adventure	

Key : Each  = 5 children

- How many children like cartoon?
- How many children like Adventure?
- Which channel is liked by most number of children?
- How many children like Sports?