

**INTERNATIONAL INDIAN SCHOOL BURAI DAH**  
**WORKSHEET FOR THE ACADEMIC YEAR 2023-24**

CLASS 4<sup>th</sup>

SUBJECT: GK.

DATE : 27.08.23

I. FILL UP THE BLANKS:

- a. The **Barehipani fall** is a Beautiful waterfall located in simlipal National Park.
- b. **Nohkalikai falls** Is located near Cherrapunji in east khasi hills district, fall from a height of 340 metre.
- c. **Kunchikal falls** is situated in the border district of Udupi Shimoga in Karnataka, its height is 455 metres.

II. **MATCH THE FOLLOWING:**

1. The first Indian woman to climb mount Mount Everest.
  2. First tribal woman to be elected President of India.
  3. First women IPS officer in India.
  4. First woman President of India.
  5. First woman Prime Minister of India.
  6. First Indian actress in Indian movies.
  7. First Indian woman astronaut.
  8. First Indian woman to fly an aircraft.
- a. Kiran Bedi
  - b. Bachhendri Pal
  - c. Draupadi Murmu
  - d. Indira Gandhi
  - e. Sarla Thakral
  - f. Pratibha Patil
  - g. Durgabai Kamat
  - h. Kalpana Chawla

Ans. 1b , 2c , 3a , 4f , 5d , 6i, 7h , 8e

III. NAME THE FOLLOWING

- a. Name the dark forest of Chhattisgarh, its entrance is called Hathipal. Ans. Jogimara caves
- b. Name a UNESCO world heritage site in TAMIL NADU dedicated to Varaha avatar. Ans. Varaha Caves.

IV. IDENTIFY THE LOCATIONS OF THESE FAMOUS GARDENS IN INDIA:

1. Lal Bagh                      Bengaluru
2. Mughal Garden      New Delhi
3. Mehtab Bagh      Agra
4. Hanging Garden      Mumbai

V. Write the colour Name of the cities:

1. Udaipur      White city
2. Cuttack      Silver city
3. Jaisalmer      Brown city
4. Chandigarh      Green city
5. Nagpur      Orange city
6. Amritsar      Golden city
7. Jaipur      Pink city
8. Kolkata      Black city
9. Jodhpur      Blue city
10. Thiruvananthapuram      Evergreen city

VI. IDENTIFY THE COUNTRIES TO WHICH THESE COSTUMES BELONG:

## Traditional Costumes

Most of the countries have their traditional costumes. Here are a few of them.  
Can you identify the countries to which these traditional costumes belong?



India



Mexico



Scotland



Japan



Russia



Saudi Arabia



Vietnam



Norway



Turkey



Mongolia



Namibia

VII. WRITE WHAT EACH TRAFFIC SIGNAL SIGNIFIES :

Traffic signals guide us through traffic. Write what each traffic signal signifies.

1 Speed limit

2 Give way ahead

3 Railway crossing ahead

4 Load limit

5 Traffic circle ahead

6 Sharp right curve ahead

7 U - turn prohibited

8 Cross road ahead

**HELP BOX**

- (a) Crossroad ahead
- (b) Load limit
- (c) Speed limit
- (d) Traffic circle ahead
- (e) U-turn prohibited
- (f) Sharp curve right
- (g) Railway crossing ahead
- (h) Give way ahead

35

VIII. CHOOSE THE CORRECT ANSWER:



## Quiz 1

Choose the correct answer :

1. Which mineral is good for your bones?  
☒ (a) calcium                      (b) iodine                      (c) iron
2. Which is the biggest internal organ of the human body?  
 (a) heart                      (b) pancreas                      ☒ (c) liver
3. Where is the saliva produced in our body?  
☒ (a) mouth                      (b) liver                      (c) stomach
4. How much time does it take to digest food?  
 (a) 6 to 12 hours                      ☒ (b) 24 to 72 hours                      (c) 72 to 150 hours
5. Where do you find haemoglobin in our body?  
 (a) stomach                      ☒ (b) blood                      (c) pancreas
6. Which among the following Vitamins is made by the human body?  
 (a) vitamin A                      (b) vitamin E                      ☒ (c) vitamin D
7. What makes things or bodies free from germs?  
☒ (a) antiseptic                      (b) insulin                      (c) antibody
8. Which among the following needs vaccination to prevent its occurrence?  
 (a) malaria                      ☒ (b) polio                      (c) indigestion
9. What causes the disease called 'Anaemia'?  
☒ (a) deficiency of iron                      (b) lack of minerals                      (c) lack of fats
10. What is the outermost layer of the skin called?  
☒ (a) epidermis                      (b) corneum                      (c) lucidum



## I.Q. Challenge 1

Select the figure which is different from the other three figures:

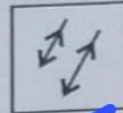
1.



☐ (a)



☐ (b)

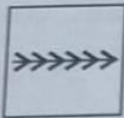


☒ (c)

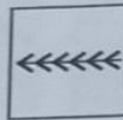


☐ (d)

2.



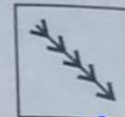
☐ (a)



☐ (b)




☐ (c)




☒ (d)

A series is given with one figure missing. Choose the correct alternative from the given ones that will complete the series:

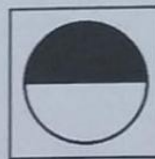
3. Problem figure:



☒ (a)



☐ (b)



☐ (c)



☐ (d)

Tick (✓) the correct answer in each case:

4. Water is related to Ocean in the same way as snow is related to:

☐ (a) peaks

☐ (b) mountain

☒ (c) glacier

☐ (d) town

5. A, G, M, S, ?

☒ (a) Y

☐ (b) U

☐ (c) W

☐ (d) O