

INTERNATIONAL INDIAN SCHOOL BURAI DAH

Worksheet for the Academic Year 2023 - 2024

SUBJECT : MATHEMATICS

CLASS : 4

Lesson # 12 TIME

DATE : 23 -12 -2023

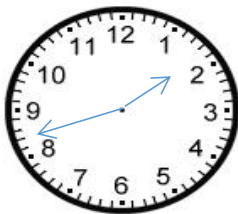
**1. Fill in the blanks :**

- a. The short form of 18 February 2024 is \_\_\_\_\_ .
- b. A leap year has \_\_\_\_\_ days.
- c. When the minute hand moves from one number to the other, \_\_\_\_\_ minutes have passed.
- d. The time from 12 midnight to 12 noon is indicated by \_\_\_\_\_ .
- e. A \_\_\_\_\_ helps to organize events in the order of their happening.

**2. Fill in the blanks with a.m. or p.m.**

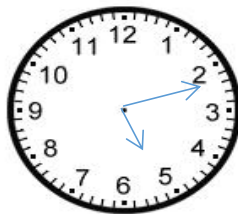
- a. 6 hours after midnight is 6:00 \_\_\_\_\_
- b. Priya came back from school at 3:30 \_\_\_\_\_
- c. Sam leaves for office at 7:30 \_\_\_\_\_
- d. The lunch break is at 12:30 \_\_\_\_\_

**3. Write the time in 12-hour and 24-hour formats.**



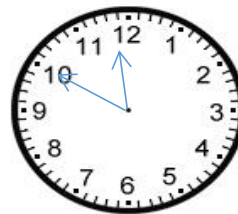
Afternoon

\_\_\_\_\_  
\_\_\_\_\_



Morning

\_\_\_\_\_  
\_\_\_\_\_



Night

\_\_\_\_\_  
\_\_\_\_\_

4. Examine if 1980, 2028, 1780 and 1856 are leap years.

5. Find the time duration between

- |                             |                                |
|-----------------------------|--------------------------------|
| a. 09:15 a.m. and 6:45 p.m. | b. 14:00 hours and 20:30 hours |
| c. 2:25 p.m. and 10:55 p.m. | d. 4:20 a.m. and 11:50 a.m.    |

6. The magic show started at 6:30 p.m. and ended at 9:50 p.m. Find the time duration of the show .

7. Preethi's board exams will start on 25<sup>th</sup> February and the last exam will be on June 5<sup>th</sup> . What will be the total duration of her exams ?

8. Draw a clock to show the time 5:34