





INTERNATIONAL INDIAN SCHOOL-BURAI DAH

IISB/TERM-II/MATHS/WS-10

MATHS WORKSHEET

Name: \_\_\_\_\_ UKG: ( ) Date:

I. Count, add and write the numbers in the box.



**II. Add the given numbers horizontally.**

$$3+3=$$

$$7+2=$$

$$4+3=$$

$$2+2=$$

$$3+4=$$

$$9+1=$$

$$6+2=$$

$$5+0=$$

$$4+4=$$

$$5+3=$$

$$3+3=$$

$$8+1=$$


$$1+0=$$

III. Match the pictures with the correct numbers.

$5+1=$



$2+2=$



$6+2=$



$7+2=$



$1+1=$

