

INTERNATIONAL INDIAN SCHOOL, BURAIDAH

COMPUTER SCIENCE

CLASS I A/B - 2025-26

Worksheet Sheet-TERM 2 (L#6,L#7,L#8,L#11)

Section A: Tick the correct answer.


1. If the number of objects is less, it is easy to line up the objects and:
a) Count them one by one b) Group them together c) Guess the number
2. The relation between different sides of a square is that they are:
a) All same b) Two are same c) All different
3. If the number of things being counted is large, it's better to _____ the objects, add and count ahead.
a) Group b) Divide c) Multiply
4. A map is a view from:
a) top b) bottom c) left
5. If there are 10 apples and 4 mangoes in a basket, the total number of fruits is:
a) 9 **b) 14** c) 10
6. The number of sides of a square
a) 5 **b) 4** c) 3
7. How many small squares are there in a 3×3 grid?
a) 5 **b) 9** c) 3
8. What are the next missing items in the given series? Hat, Mat, Pat, _____, _____
a) Pit, Lit **b) Cat, Bat** c) Pot, Cot
9. Map helps us to find:
a) Places b) Sleep c) Write stories
10. A path to be taken should be :
a) Clear b) Dangerous c) Watery
11. You have 5 pencils in a box. If there are 2 boxes, the total pencils are:
a) 9 b) 14 **c) 10**
12. How many small squares are in 2×2 grid ?
a) 1 b) 0 **c) 4**
13. What is the next term in the given series? 5, 10, 15, ____
a) 14 b) 16 **c) 20**

Section B: Match the following

14.A word that sounds the same as Mare, Care	Poetry																					
15. There is no path between : (White cells are dangerous)	*(16)																					
<table><tr><td></td><td>A</td><td>B</td><td>C</td><td>D</td><td>E</td><td>F</td></tr><tr><td>1</td><td></td><td></td><td></td><td></td><td></td><td></td></tr><tr><td>2</td><td></td><td></td><td></td><td></td><td></td><td></td></tr></table>		A	B	C	D	E	F	1							2							
	A	B	C	D	E	F																
1																						
2																						
16. ****,***,**,_____	☆ (18)																					
17.The smallest term in series 2,4,6,8,_____	****																					
18. <input type="text"/> , ☆ , <input type="text"/> ,_____	Fare(14)																					
19.A word that sounds the same as Fist,list,_____	B1 to D1(15)																					
20. *,**,***,_____	10(17)																					
21.The presence of patterns in words is found usually in	Cyst(19)																					

Section D: Answer the following questions. (8 questions)

22. White cells are dangerous



	A	B	C	D	E	F	G
1	A1 START	B1	C1	D1	E1	F1	G1
2	A2	B2	C2	D2	E2	F2	G2
3	A3	B3	C3	D3	E3	F3	G3
4	A4	B4	C4	D4	E4	F4	G4 END



- Before taking the first step, Jax- the dog faces:
 - B1
 - B3
 - C4
- After taking B1, Jax needs to face towards:
 - B1
 - B2
 - C4
- After reaching which cell, will Jax face D3?
 - B1
 - B2
 - C3
- What is the cell Jax was in before reaching E3?

a) **D3** b)B2 c)C4


























5)To reach G3, Jax necessarily passes through:

a) C4 b)**F3** c)E1

6) After taking F4, Jax needs to face towards:

a) **G4** b)E3 c)E4

23. Count the following and write the number of the given fruits:

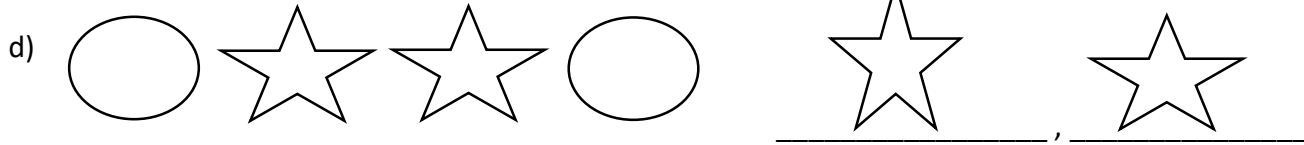


24. Fill the following pattern

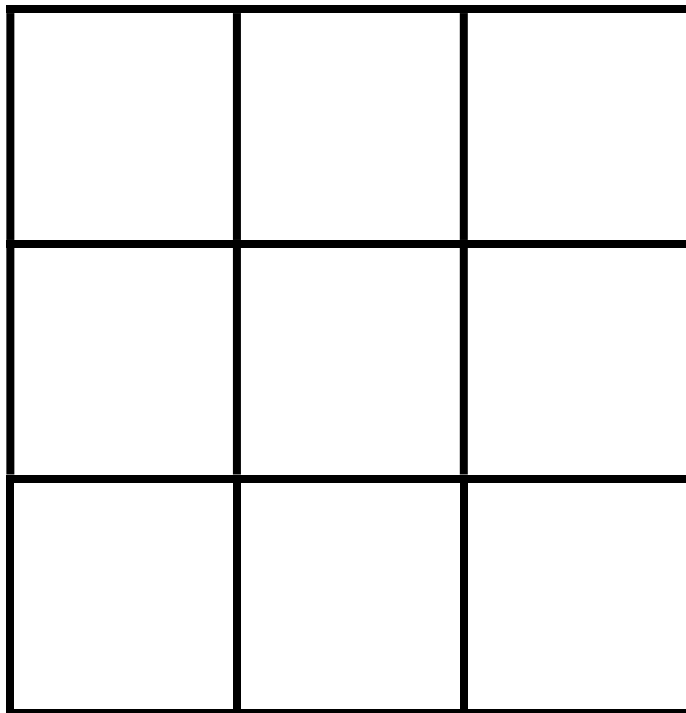
a) 12,15,18,**21,24**

b)10,20,30,40,50,**60,70**

c)A,B,D,E,G,H,J,**K,M**



25.



a) Total number of squares: **14** (Small squares = 9,Medium squares = 4,Biggest square = 1)

b) Total number of small squares: **9**

c) Total number of biggest squares: **1**

26. a) Total number of squares: **5**

b) Number of rectangles: **4**

