

INTERNATIONAL INDIAN SCHOOL BURAI DAH

Worksheet for the Academic Year 2025-26

Ch#4 SHAPES & PATTERNS

MATHS WORKSHEET#04

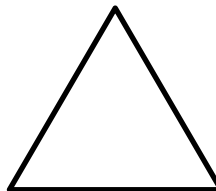
NAME: _____ CLASS 1 () DATE: _____


I. FILL IN THE BLANKS.

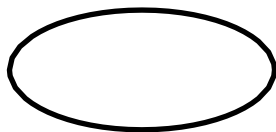
1. A triangle has _____ sides.
2. A rectangle has _____ long sides and _____ short sides.
3. A circle is made of _____ curved line.
4. A square has _____ equal sides.


II. NAME THE SHAPES GIVEN BELOW.





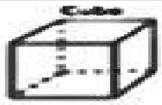




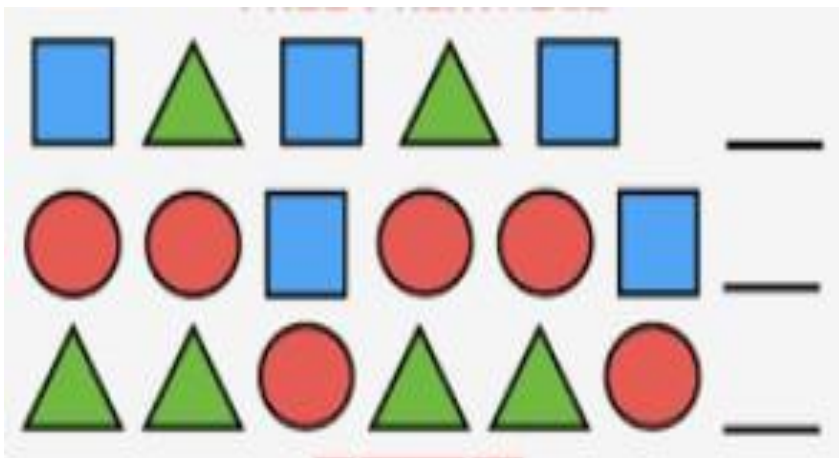




III. Match the shapes with the objects.



IV. WHAT COMES NEXT.



V. RING THE ONE THAT IS THE SAME SHAPE AND SIZE

