

INTERNATIONAL INDIAN SCHOOL BURAI DAH

Worksheet for the Academic Year 2025- 26







Name: _____ CLASS:2 () SUBJECT : MATHS / DATE: _____

Ch#10 MEASUREMENT

A. FILL IN THE BLANKS:

- 1) We use _____ and _____ to weigh things .
- 2) 1 m = _____ cm.
- 3) We use _____ to measure longer lengths.
- 4) We use _____ to measure larger quantities of liquid.
- 5) The short form of millilitre is _____.
- 6) Heavier objects are measured in _____

B. Does it hold more or less than 1 Litre. Circle the correct answer.

1. 	2.  x3	3. 
more / less	more / less	more / less
4. 	5. 	6. 
more / less	more / less	more / less

C. Choose the unit to measure the weight of each item. Write grams or kilograms.

1.



2.



3.



4.



5.



6.



