

INTERNATIONAL INDIAN SCHOOL BURAIDAH

Worksheet for the Academic Year 2025- 26

Name: _____ CLASS:2 () SUBJECT : MATHS / DATE: _____

Ch#12 MONEY

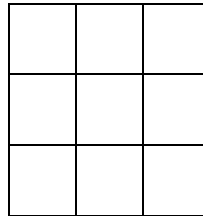
A) FILL IN THE BLANKS

- 1) _____ is the symbol of rupees .
- 2) Money can be counted in _____ and _____.
- 3) The side of the coin showing its value is _____ and the other side is called _____.

SOLVE

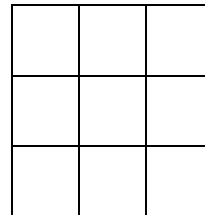
- 1) Adil bought a T-shirt ₹87 and pair of jeans ₹ 445. Find the total amount paid by him .

ANS: _____





- 2) Priya has ₹125 with her . She buys a story book for ₹ 112 . How much money is now left with her.

Ans: _____



- 3) Draw the notes and coins you can get in exchange for ₹50.



c) Count and write the total money:

1.



2.



3.



D)SOLVE

Price of the item	Amount paid	Change to be given
₹5 		
₹15 		
₹10 		
₹8 		
₹12 		