

INTERNATIONAL INDIAN SCHOOL BURAI DAH

Worksheet for the Academic Year 2025-26

Name : _____ CLASS :2 () SUBJECT: MATHS DATE: _____

Ch#11 TIME

A) FILL IN THE BLANKS:

a) The four main directions are _____, _____, _____ and _____.

b) February has _____ days in a leap year.

c) The short hand of a clock is _____.

d) The long hand of a clock is _____.

e) The hour hand takes _____ to move from one number to the next.

f) The minute hand takes _____ to go around the entire clock.

g) _____ is the shortest month of a year.


h) 4 o'clock is 2 hours _____ than 6 o'clock.

i) Time 6:30 is read as _____.


j) Time 3:30 is read as _____.

B) Draw hour hand and minute hand on the face of the clocks to show the given time.


a. 8:00



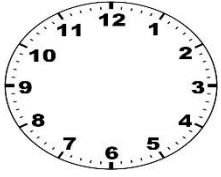
b. 1:30




c. 12:30




d. 5:00



e. 3:00



g. 9:30



C) Write the time shown on the face of the clock.

