

INTERNATIONAL INDIAN SCHOOL BURAI DAH

Worksheet for the Academic Year 2025- 26


Name: _____ CLASS:2 () SUBJECT : MATHS / DATE: _____

Ch#14 Division Readiness

***When something is grouped or divided equally , it is called equal sharing .**

A) SOLVE BY SHARING EQUALLY.


1) Share 12 carrots among 2 rabbits.



12 shared equally among 2 gives _____ in each

12 divided by 2 = _____

2) Share 15 candies among 3 children




15 shared equally among 3 gives _____ in each

15 divided by 3 = _____


B) Circle in equal groups to find out how many groups.

1) Make groups of 3




12 put into groups of 3 gives _____ groups.

2) Make a groups of 4



8 put into groups of 4 gives _____ groups.

3) Make a groups of 2



14 put into groups of 2 gives ____ groups.