

INTERNATIONAL INDIAN SCHOOL BURAIDAH

Worksheet for the academic year 2026-2027


Maths Worksheet#03


Topic: Ch#4 Shapes and Patterns

Name: _____ Class: 1 () Date: _____


I. Name the shapes given below.











II. Fill in the blanks.

1. A square has _____ sides.
2. A circle is made of _____ curved line.
3. A rectangle has _____ long sides and _____ short sides.
4. A triangle has _____ sides.

III. Match the shapes with the objects.



•



•



•



•



•



•



•



•



•



•

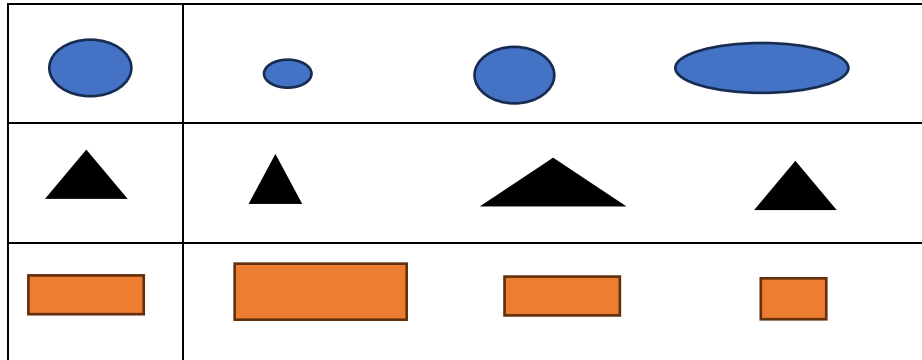


•



•

IV. Ring the one that is the same shape and size.



V.

Write or draw what comes next in the pattern.

